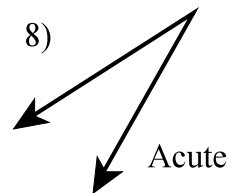
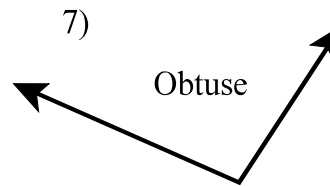
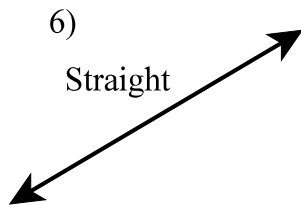
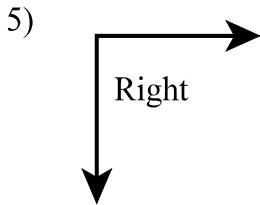
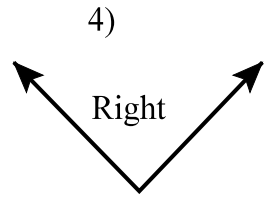
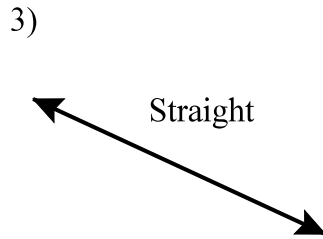
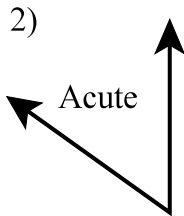
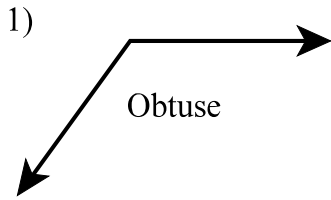


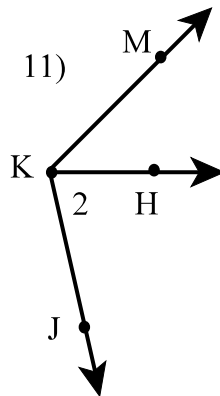
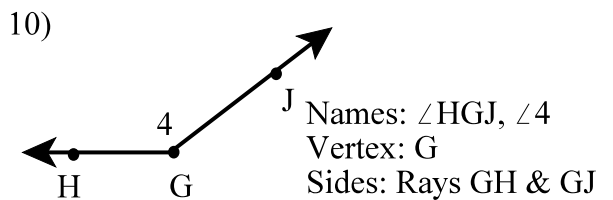
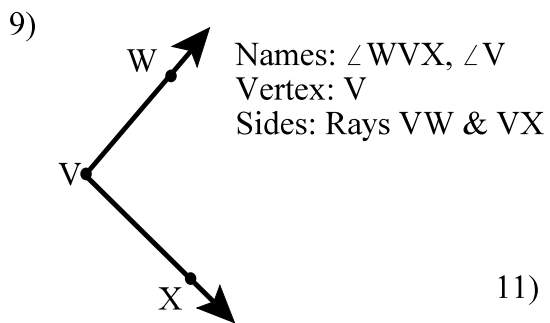
Angles and Measurement 2  
Geometry

**(KEY)**

Classify the following angles.



Name the following angles in two ways. Identify the vertex and sides of each angle



1) Names:  $\angle JKH$ ,  $\angle 2$   
Vertex: K  
Sides: Rays KJ & KH

2) Names:  $\angle MKJ$ ,  $\angle JKM$   
Vertex: K  
Sides: Rays KM & KJ

3) Names:  $\angle MKH$ ,  $\angle HKM$   
Vertex: K  
Sides: Rays KM & KH

Measure the following angles.

