

Triangle Fundamentals
Geometry

1) Name the sides in $\triangle ABC$.

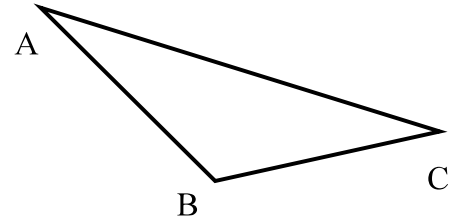
2) Name the vertices in $\triangle ABC$.

3) Which side is opposite $\angle A$?

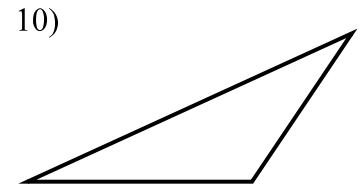
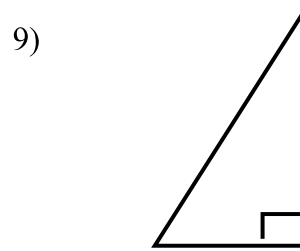
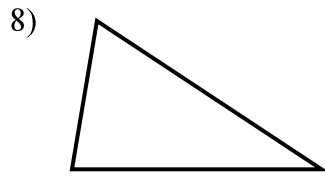
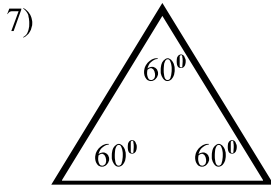
4) Name the angle opposite \overline{AC} .

5) Name the side included between $\angle A$ and $\angle C$.

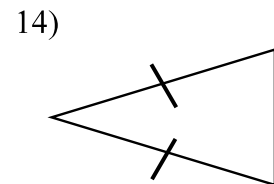
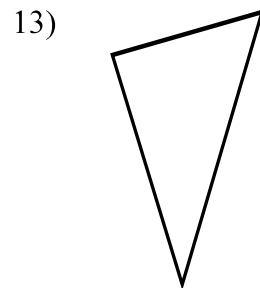
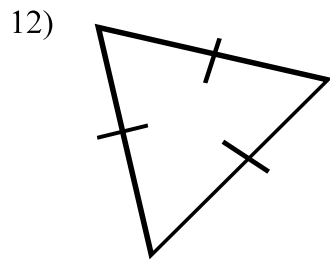
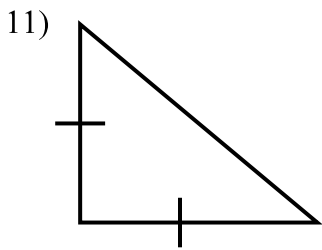
6) Name the angle included between \overline{AC} and \overline{BC} .



Classify each triangle by its angles.



Classify each triangle by its sides.



Find the measure of the missing angle.

