

Triangle Fundamentals 2
Geometry

1) Name the sides of $\triangle XYZ$.

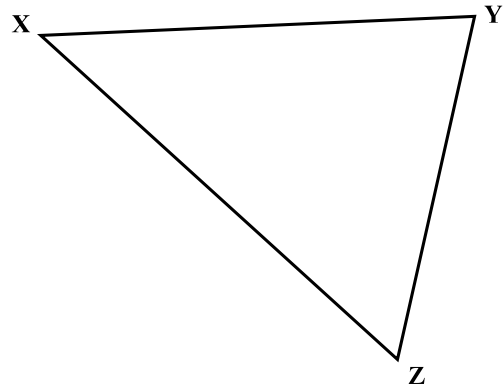
2) Name the vertices of $\triangle XYZ$.

3) Which side is opposite $\angle Y$?

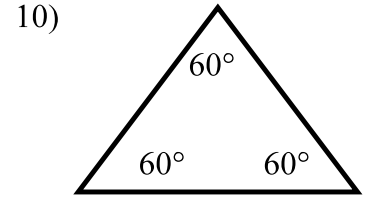
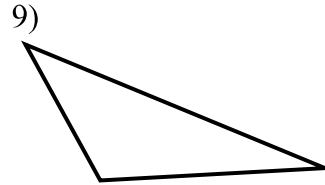

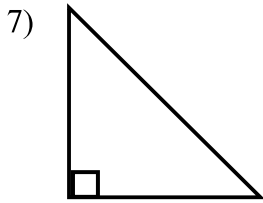
4) Name the angle opposite \overline{YZ} .

5) Name the side included between $\angle Z$ and $\angle X$.

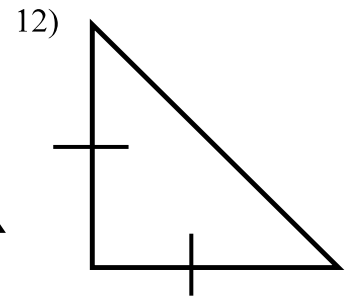
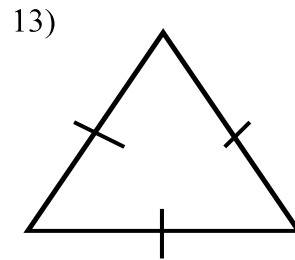
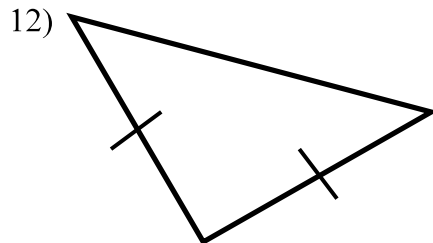
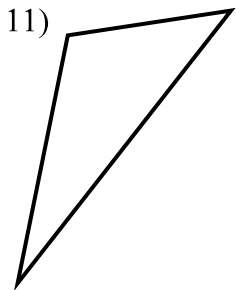
6) Name the angle included between \overline{YZ} and \overline{XZ} .



Classify each triangle by its angles.



Classify each triangle by its sides.



Find the measure of the missing angle.

