

Functions 2
Algebra 2

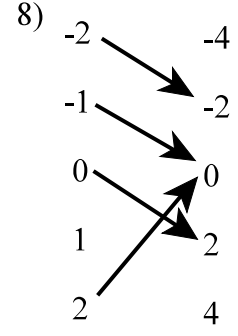
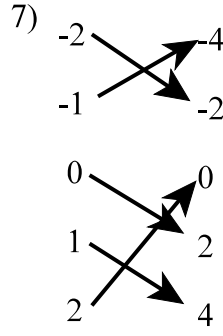
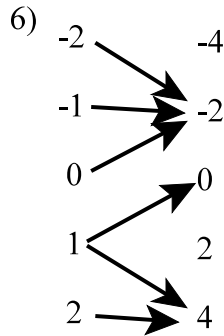
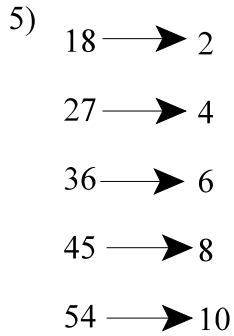
1) What is a relation?

2) What is a function?

3) What is the domain of a function?

4) What is the range of a function?

Are the relationships functions?



Does the t-table describe a function? Explain?

9)

Input	7	8	9	8	7
Outcome	5	-2	-2	5	5

10)

Input	6	5	4	3	5
Outcome	1	2	3	4	2

11)

Input	-8	-4	0	1	2
Outcome	3	8	-2	5	1

12)

Input	4	3	2	3	4
Outcome	1	2	3	4	5

Give the domain and range of each relation in 13 - 15.

13)

t	-1	3	5	-7
v	4	-2	9	-1

14) $\{(5, 3); (6, 3); (7, 3); (8, 3)\}$

15)

x	y
4	1
5	1
6	-2
7	-2

Fill in the table for each function.

16) $y = 3x + 1$

17) $q = p^2 + 5$

18) $f(x) = x^2 + x$

19) $f(t) = t^3$

x	y
-3	
-1	
2	
	13

p	q
-2	
0	
1	
3	

x	f(x)
-1	
2	
	20
	56

t	1	2	3	4
f(t)				

20) $z = 2^y$

y	0	1	2	3
z				

Are the following relationships functions? If so, give the domain.

- 21) $\{(3, -1); (7, 2); (9, 0); (7, -1)\}$ 22) $\{(-1, 3); (2, 3); (-4, 3)\}$ 23) $\{(-2, 3); (-2, 4); (-2, 5); (-2, 6)\}$

Which sets of ordered pairs represent functions from A to B? Explain.

$A = \{5, 6, 7, 8, 9\}$; $B = \{-1, -2, -3, -4, -5\}$

- 24) $\{(5, -1); (8, -2); (6, -3); (5, -4)\}$ 25) $\{(7, -3); (9, -2); (6, -1); (5, -5); (8, -4)\}$

Match the set of values to the function that produces the set.

26)

a	f(a)
-2	-3
-1	-4
3	-8
5	-10

27)

a	f(a)
-1	4
0	3
1	2
3	0

28)

a	f(a)
-1	4
0	3
1	4
2	7

29)

a	f(a)
1	3
2	9
3	27
4	81

A. $f(a) = a - 1$

B. $f(a) = a^2 + 3$

C. $f(a) = -a + 3$

D. $f(a) = -a - 5$

E. $f(a) = 3^a$

Evaluate the following functions for $f(1)$, $f(-2)$, $f(3x)$, and $f(x - 1)$. (Use the back, if necessary.)

30) $f(x) = x - 3$

31) $f(x) = 4x + 1$

32) $f(x) = x^2 - 3x + 8$

33) $f(x) = -x^2 + x + 9$

Are the relations graphed below functions?

