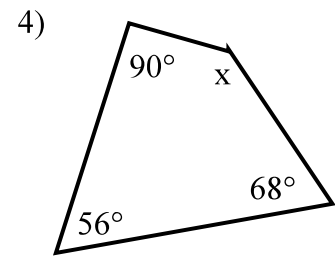
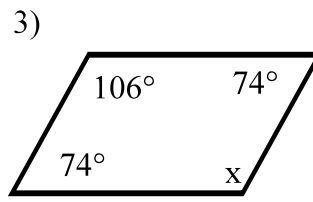
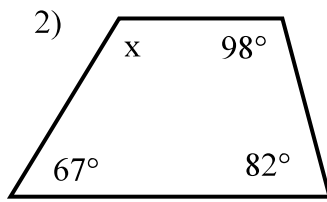
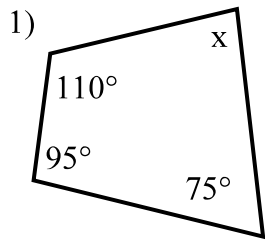
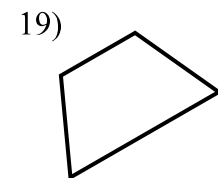
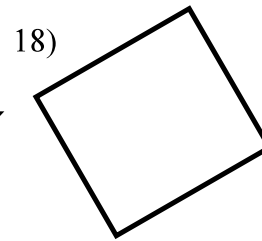
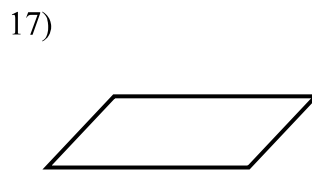
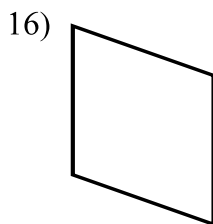
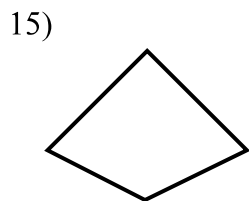
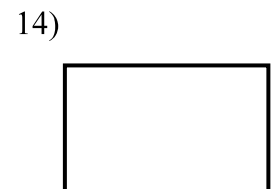
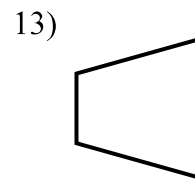
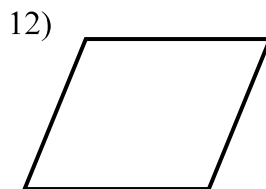
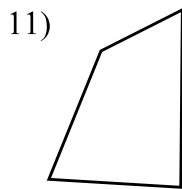
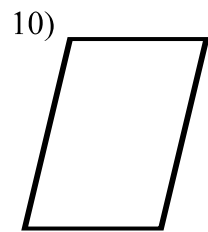
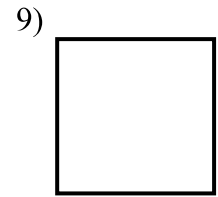
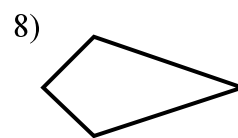
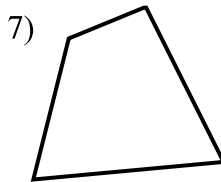
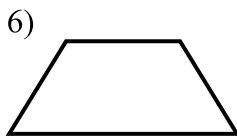
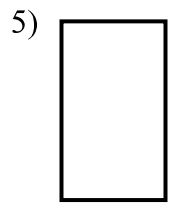


## Quadrilaterals Geometry

Find the missing angle.



Identify the quadrilaterals.



Use the words *always*, *sometimes*, or *never* to complete each sentence accurately.

20) A parallelogram is \_\_\_\_\_ a quadrilateral.

21) A kite is \_\_\_\_\_ a trapezoid.

22) A rhombus is \_\_\_\_\_ a parallelogram.

23) A parallelogram is \_\_\_\_\_ a rhombus.

24) A rectangle is \_\_\_\_\_ a square.

25) A quadrilateral is \_\_\_\_\_ a trapezoid.

Try to draw a quadrilateral with the following properties. Name each, if possible.

26) Exactly one pair of congruent sides.

27) Four congruent sides.

28) Exactly two right angles.

29) Exactly three right angles.