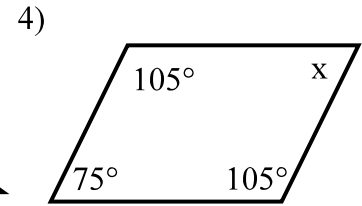
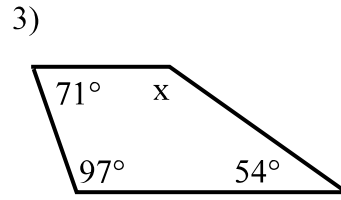
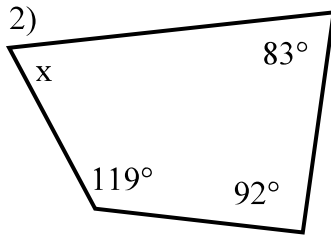
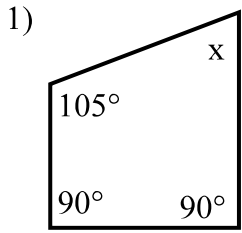
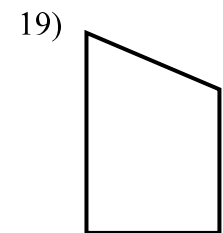
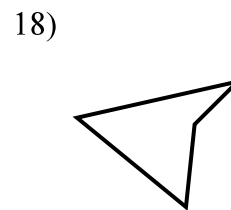
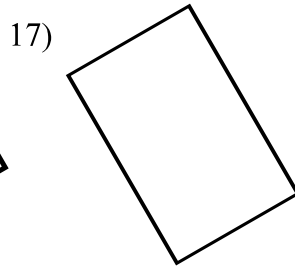
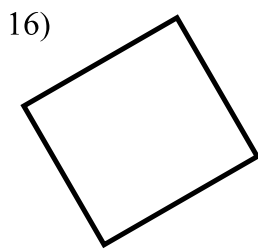
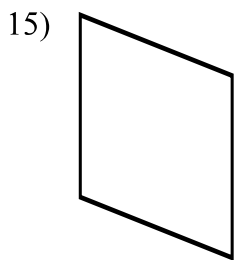
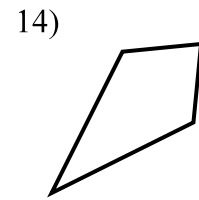
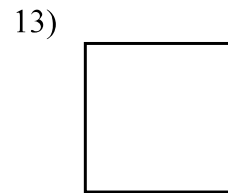
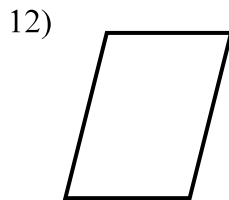
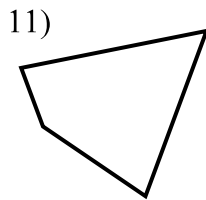
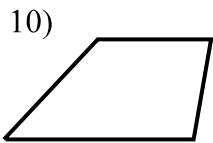
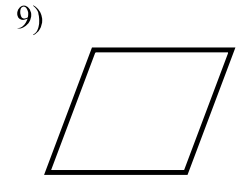
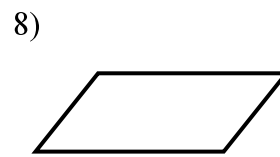
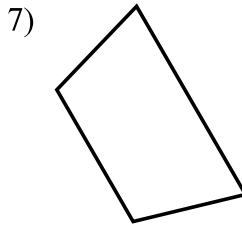
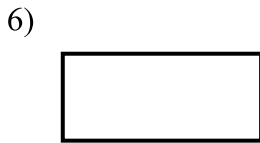
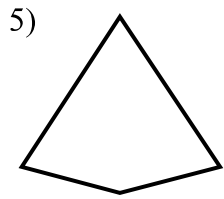


Quadrilaterals 2
Geometry

Find the missing angle.



Identify the quadrilaterals.



Use the words *always*, *sometimes*, or *never* to complete each sentence accurately.

20) A quadrilateral is _____ a parallelogram . 21) A trapezoid is _____ a kite.

22) A parallelogram is _____ a rhombus. 23) A square is _____ a rhombus.

24) A square is _____ a rectangle. 25) A trapezoid is _____ a quadrilateral.

Try to draw a quadrilateral with the following properties. Name each, if possible.

26) Exactly one pair of parallel sides.

27) Exactly three congruent sides.

28) Exactly one right angle.

29) Exactly three acute angles.