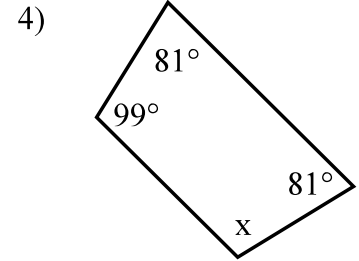
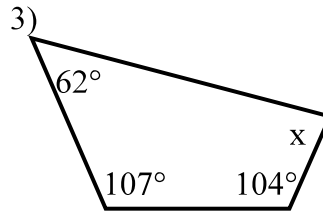
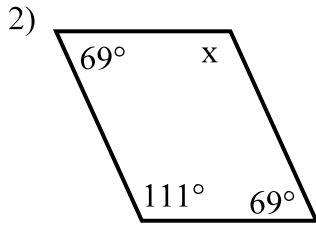
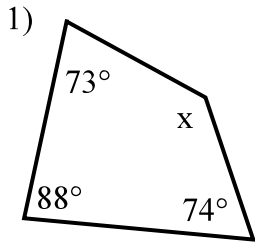
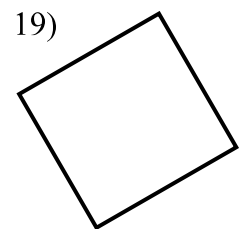
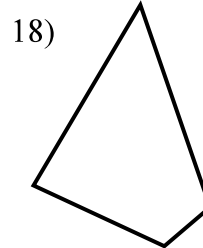
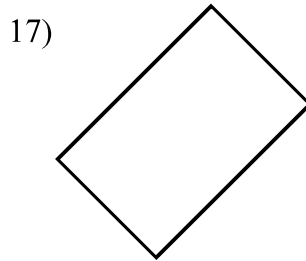
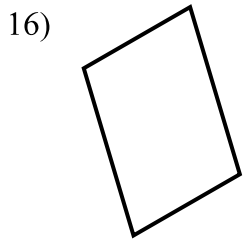
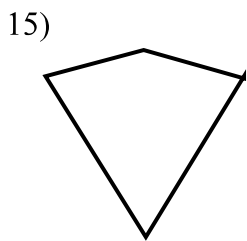
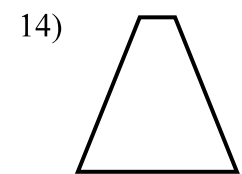
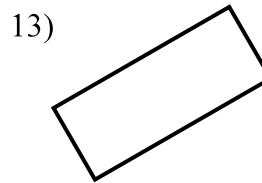
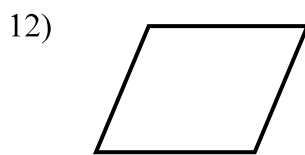
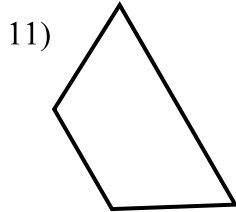
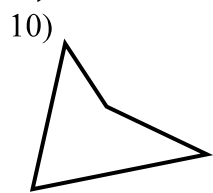
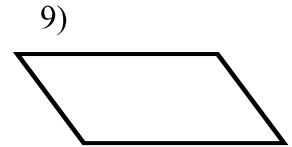
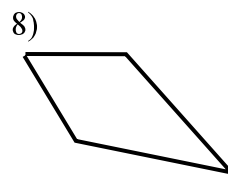
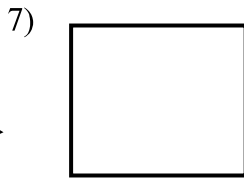
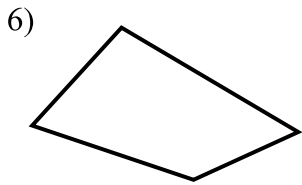
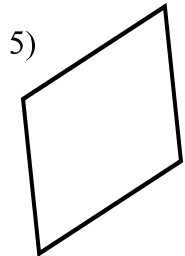


Quadrilaterals 3
Geometry

Find the missing angle.



Identify the quadrilaterals.



Use the words *always*, *sometimes*, or *never* to complete each sentence accurately.

20) A parallelogram is _____ a square. 21) A kite is _____ a rhombus.

22) A quadrilateral is _____ a rectangle. 23) A square is _____ a rectangle.

24) A rhombus is _____ a trapezoid. 25) A parallelogram is _____ a quadrilateral.

Try to draw a quadrilateral with the following properties. Name each, if possible.

26) Exactly two acute angles.

27) Exactly two congruent sides.

28) Exactly two right angles.

29) Exactly three obtuse angles.