

Graph the following ordered pairs on the coordinate plane.

1 - 12 – Graph the coordinates on the Plane.

Perform each of the following with each equation.

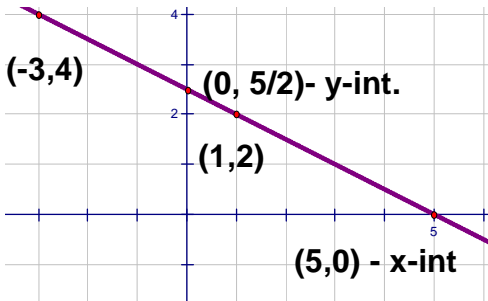
A. Use a T-table to find four solutions.

B. Give the x and y-intercepts.

C. Graph the equation.

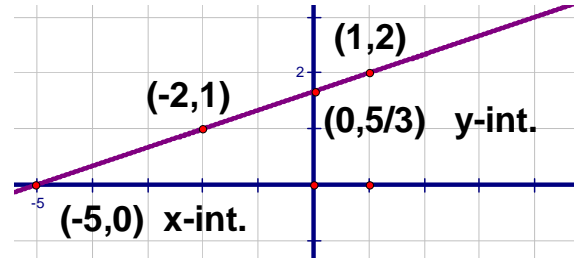
13) $2a + 4b = 10$

a	b
0	5/2
5	0
1	2
-3	4



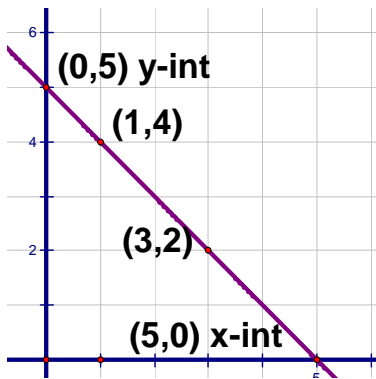
14) $-3c + 9d = 15$

c	d
0	5/3
-5	0
1	2
-2	1



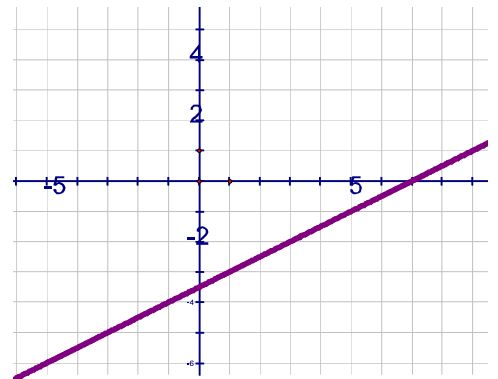
15) $-4f = 4h - 20$

f	h
0	5
5	0
1	4
3	2



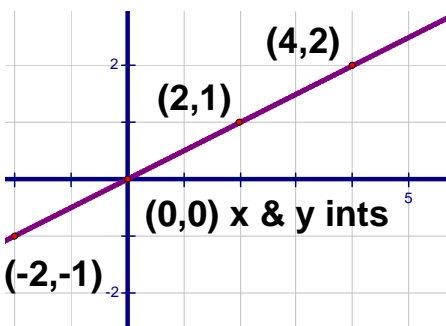
16) $j = 2k + 7$

j	k
7	0
0	-3.5
3	-2
5	-1



17) $3p = 6q$

p	q
0	0
2	1
-2	-1
4	2



18) $10y + 4z = 12$

y	z
0	3
6/5	0
2/5	2
2	-2

